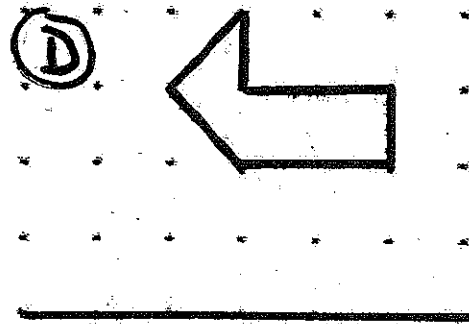
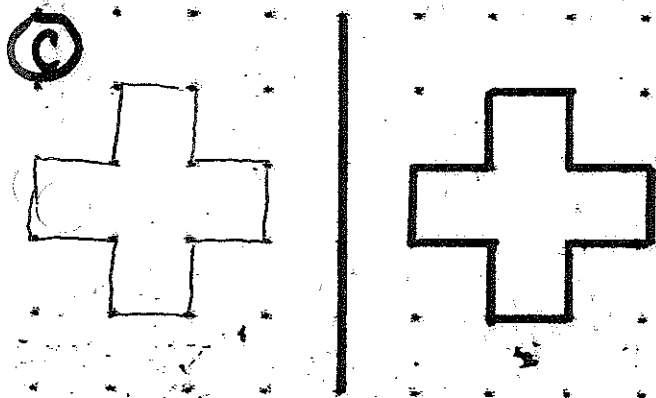
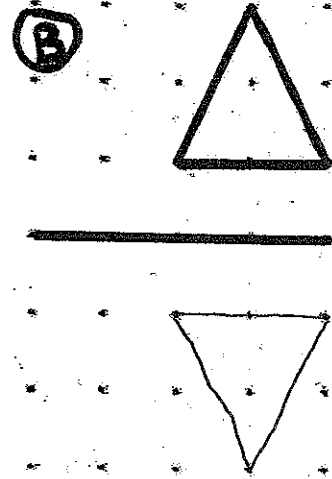
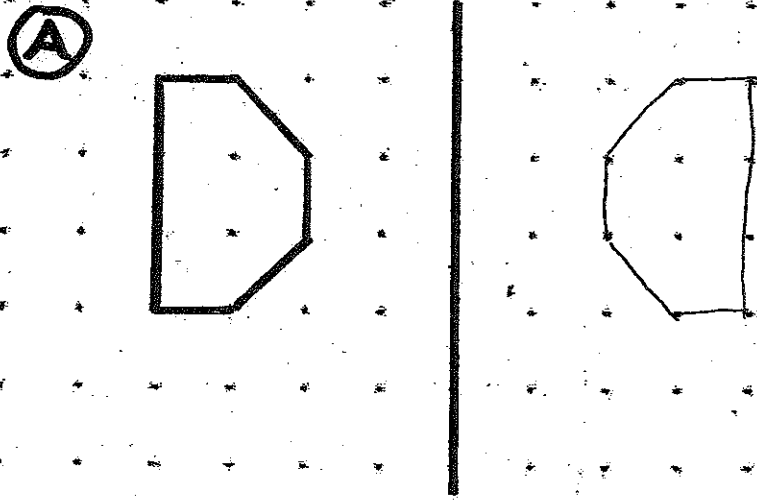
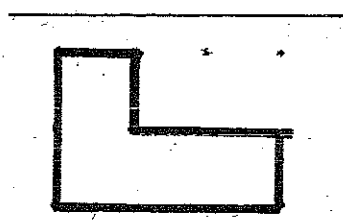
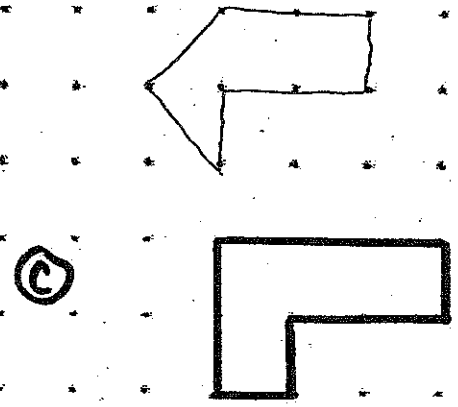
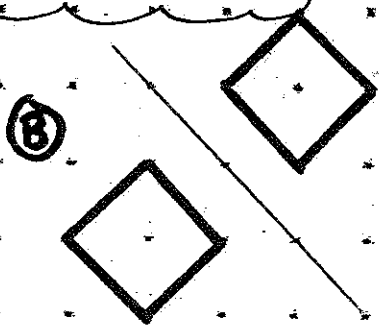
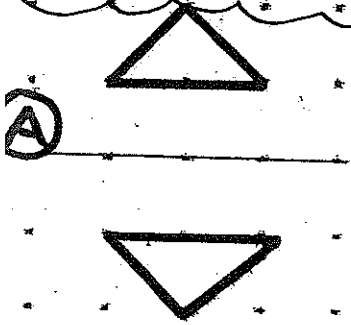


1. Dessine la réflexion en utilisant l'axe de réflexion.



2. Trace l'axe de réflexion.



Trouve la lettre inconnue.

Prénom : CORRIGÉ

01. $9 + 23 = C$

$C = 32$

02. $29 + 40 = K$

$K = 69$

03. $56 + 17 = P$

$P = 73$

04. $6 + M = 36$

$M = 30$

05. $11 + Q = 31$

$Q = 20$

06. $Y + 10 = 49$

$Y = 39$

07. $H + 9 = 59$

$H = 50$

08. $B + 17 = 27$

$B = 10$

09. $13 + N = 33$

$N = 20$

10. $A + 6 = 22$

$A = 16$

11. $D + 25 = 55$

$D = 30$

12. $8 + E = 50$

$E = 42$

13. $G + 33 = 56$

$G = 23$

14. $25 + R = 85$

$R = 60$

15. $28 + S = 56$

$S = 28$

16. $22 + F = 88$

$F = 66$